

59 Décrire le cube et le pavé droit : faces et sommets

Nom :

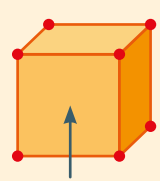
Date :

MÉMO

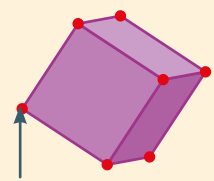
face sommet

cube

6 faces carrées
8 sommets



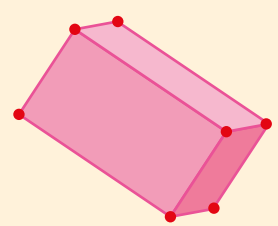
face



sommets

pavé droit

6 faces rectangulaires ou carrées
8 sommets



Nom :

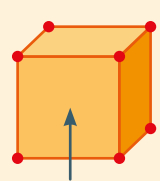
Date :

MÉMO

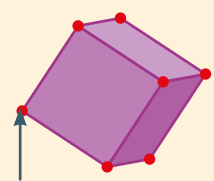
face sommet

cube

6 faces carrées
8 sommets



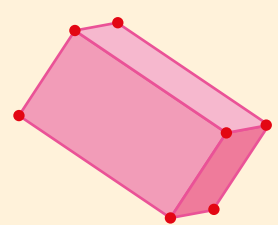

face



sommets

pavé droit

6 faces rectangulaires ou carrées
8 sommets



Nom :

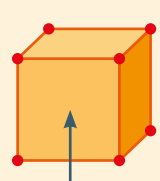
Date :

MÉMO

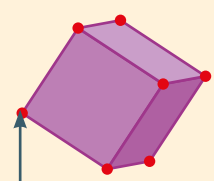
face sommet

cube

6 faces carrées
8 sommets



face



sommets

pavé droit

6 faces rectangulaires ou carrées
8 sommets

