


40

Regrouper les dizaines entre elles (jusqu'à 50)


Nom :

Date :

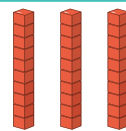
MÉMO



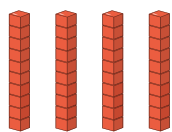
1 dizaine, c'est 10.
Il y a **dix** cubes.



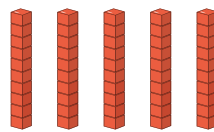
2 dizaines, c'est 20.
Il y a **vingt** cubes.



3 dizaines, c'est 30.
Il y a **trente** cubes.



4 dizaines, c'est 40.
Il y a **quarante** cubes.




5 dizaines, c'est 50.
Il y a **cinquante** cubes.




Nom :

Date :

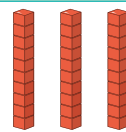
MÉMO



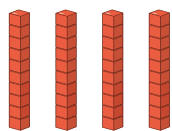
1 dizaine, c'est 10.
Il y a **dix** cubes.




2 dizaines, c'est 20.
Il y a **vingt** cubes.



3 dizaines, c'est 30.
Il y a **trente** cubes.



4 dizaines, c'est 40.
Il y a **quarante** cubes.



5 dizaines, c'est 50.
Il y a **cinquante** cubes.