

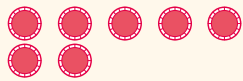
Avancer ou reculer sur une frise numérique

Nom :

Date :



Complète.



$$7 + 0 = 7$$



$$6 + 1 = 7$$



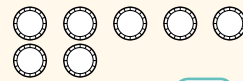
$$5 + 2 = \square$$



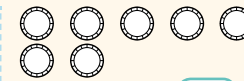
$$4 + 3 = \square$$



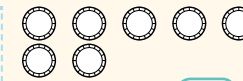
Colorie et complète.



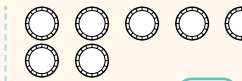
$$3 + 4 = \square$$



$$2 + 5 = \square$$



$$1 + 6 = \square$$



$$0 + 7 = \square$$

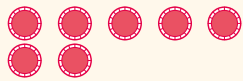


Nom :

Date :



Complète.



$$7 + 0 = 7$$



$$6 + 1 = 7$$



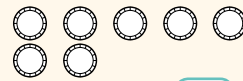
$$5 + 2 = \square$$



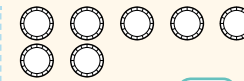
$$4 + 3 = \square$$



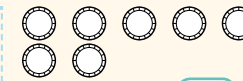
Colorie et complète.



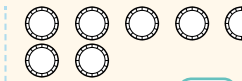
$$3 + 4 = \square$$



$$2 + 5 = \square$$



$$1 + 6 = \square$$



$$0 + 7 = \square$$

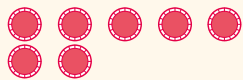


Nom :

Date :



Complète.



$$7 + 0 = 7$$



$$6 + 1 = 7$$



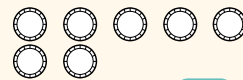
$$5 + 2 = \square$$



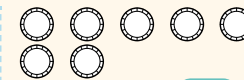
$$4 + 3 = \square$$



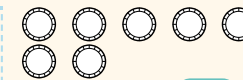
Colorie et complète.



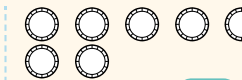
$$3 + 4 = \square$$



$$2 + 5 = \square$$



$$1 + 6 = \square$$



$$0 + 7 = \square$$